
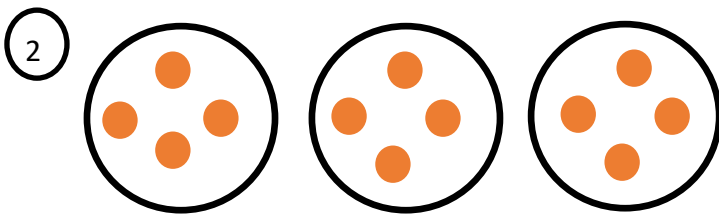


Year 1 — Multiplication
Lesson 2 counting equal groups


Count to find out how many there are altogether.



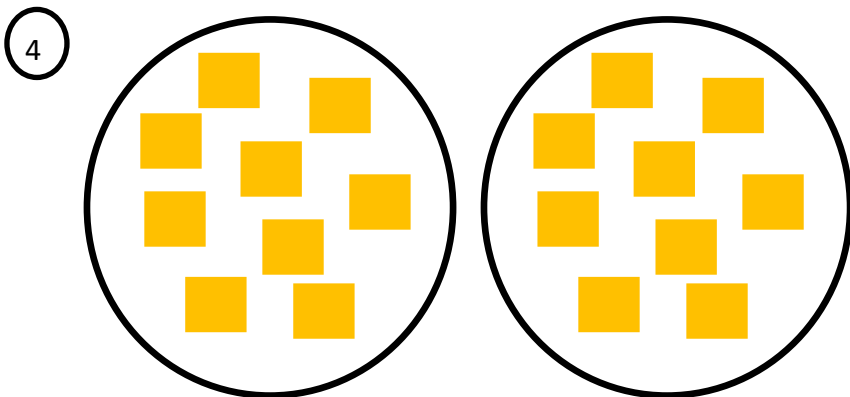
There are 2 groups.
There are 2 stars in each group.
There are 2 groups of 2.
There are _____ stars altogether.



There are 3 groups.
There are 4 spots in each group.
There are 3 groups of 4.
There are _____ spots altogether.



There are 4 groups.
There are 5 hearts in each group.
There are 4 groups of 5.
There are _____ hearts altogether.



There are 2 groups.
There are 9 squares in each group.
There are 2 groups of 9.
There are _____ squares altogether.