


Year 1 — Multiplication  
Lesson 3 counting equal groups

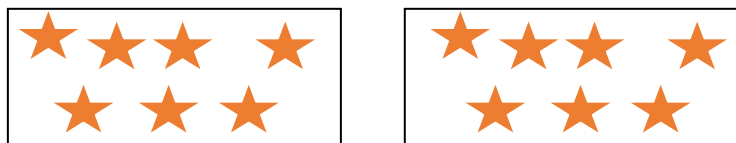
Task 1— fill in the missing gaps.

1




There are   3   groups.  
There are   5   in each group.  
There are   3   groups of   5  .  
  3   groups of   5   equals  15 .  
There are  15  dots in total.

2



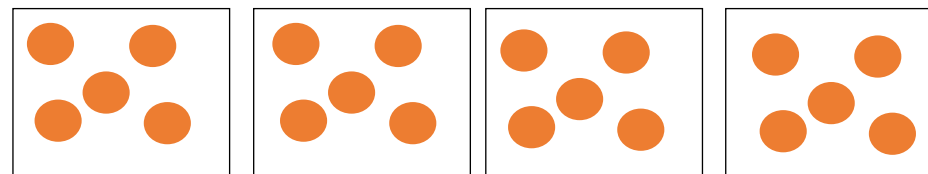
There are   2   groups.  
There are   7   in each group.  
There are   2   groups of   7  .  
  2   groups of   7   equals  14 .  
There are  14  stars in total.

3



There is   1   group.  
There are   5   in this group.  
There is   1   group of   5  .  
  1   group of   5   equals   5  .  
There are   5   suns in total.

Task 2— Can you spot the mistake and explain?



There are **5** groups.  
There are **5** in each group.  
There are **5** groups of **5**.  
**5** groups of **5** equals **20**.  
There are **20** dots in total.

There are **4**  
groups of **5** not  
**5** groups of **5**