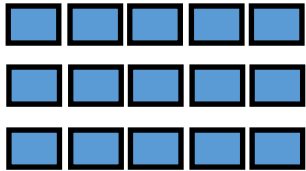


Year 1 — Multiplication

Lesson 4 making equal rows—arrays


Task 1— fill in the missing gaps.

1



There are 3 rows.  
There are 5 in each row.  
There are 3 rows of 5.  
There are 15 altogether.

2




There are 6 rows.  
There are 3 in each row.  
There are 6 rows of 3.  
There are 18 altogether.

3



There is 1 row.  
There is 4 in each row.  
There is 1 row of 4.  
There are 4 altogether.


4



There are 5 rows.  
There are 6 in each row.  
There are 5 rows of 6.  
There are 30 altogether.

Task 2— spot the mistake

Why is this not an array?



They are not all equal rows.  
There should be 5 spots in the second row.