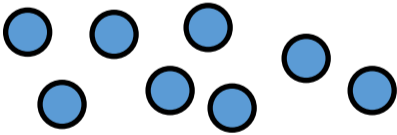
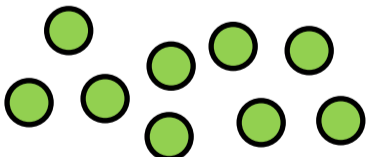


Year 1 — Division Session 2
Grouping by using pictures

Task 1
Can you count the starting number of pictures?
Can you circle the equal groups?




There are _____ altogether.
There are _____ equal groups of **2**.



There are _____ altogether.
There are _____ equal groups of **3**.



There are _____ altogether.
There are _____ equal groups of **3**.




There are _____ altogether.
There are _____ equal groups of **4**.

Task 2
Can you circle the equal groups to solve the question?



There are 15 sweets.
There are 3 sweets in each bag.
How many bags do we need?


We need bags.



There are 10 cherries.
There are 5 cherries on each cake.
How many cakes do we need?

We need cakes.

Task 3
Do you agree? Can you explain why?



There are **16** altogether.
There are **3** equal groups of **4**.