
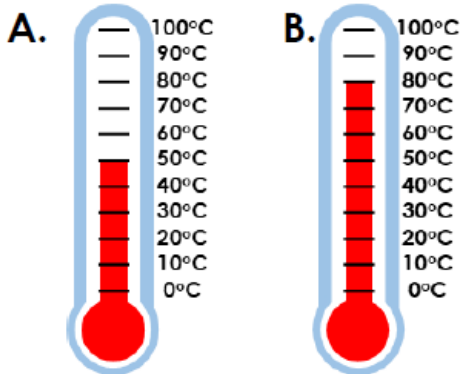


Complete the sentence.

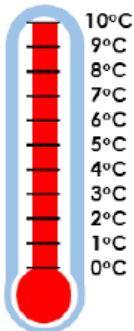


The temperature is _____.

Which is the highest temperature?

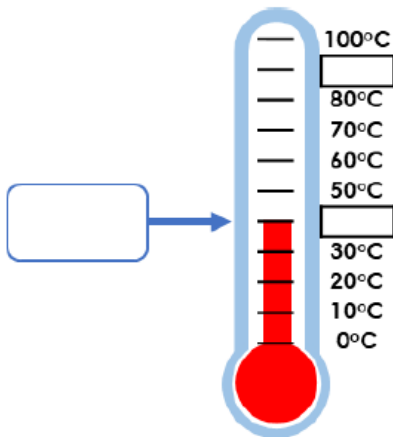


i. True or false? The temperature is 100°C.

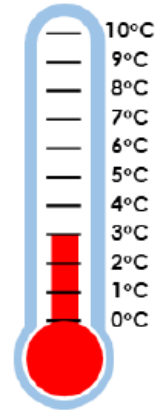


VF

Write the missing numbers on the scale and complete the temperature.

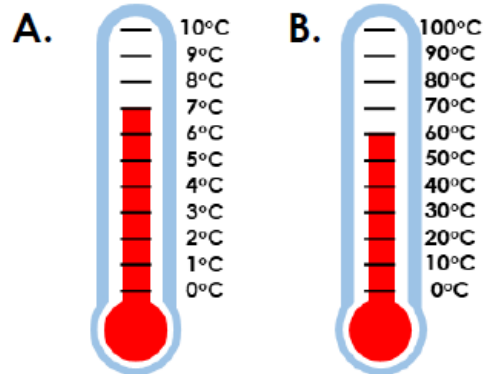


Complete the sentence.

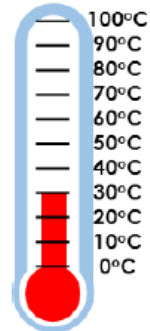


The temperature is _____.

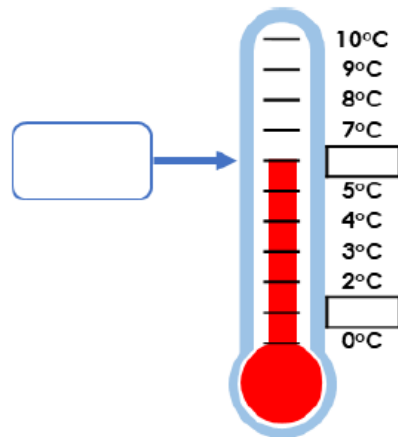
Which is the highest temperature?



True or false? The temperature is 30°C.



Write the missing numbers on the scale and complete the temperature.




Use your reasoning skills to answer these questions about litre measures.

Carter is reading the temperature outside. He says,



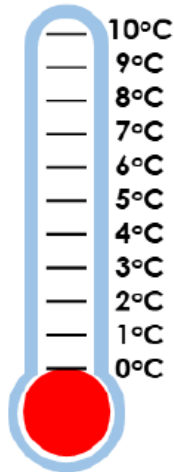
It is 8°C.



Is he correct?
Explain why.

Gabriel is describing a temperature.
Draw on the thermometer, one possibility
of what the temperature could be.

This temperature is an odd
number which is higher than
3°C.



Camilla is describing a temperature.
Draw on the thermometer, one possibility
of what the temperature could be.

This temperature is a multiple
of ten which is between 20°C
and 70°C.

