

Answer these questions relating to the volume of water in each container.

1. Circle the correct statement below.

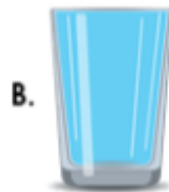


nearly empty

nearly full

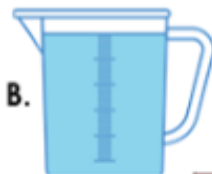
half full

2. Zara needs a cup that is full.



Which cup should she choose?

3. Put an 'X' next to the correct statement.



1. B has a greater volume than A.

2. The jugs have an equal volume.

4. Choose the correct word card to complete the statement.



is



greater than

less than

5. Match each jug to the correct label.



half full

nearly empty

6. Jack says,



The jug is nearly full.



Is he correct? Explain your answer.

7. Complete the sentences below.



A.

B.

C.

1. Cup has the greatest volume.

2. B has a greater volume than .

3. Cup is half full.

Order these containers from the smallest volume to the greatest volume.




A



B



C



smallest volume

Greatest volume

Now use the below vocabulary to write sentences to describe and compare the volume of water in the containers.

Greatest

smallest

less than

more than

nearly full

nearly empty

volume
