






Year 2— Statistics Lesson 4—pictograms

Fill in the total in each pictogram.


A pictogram to show the number of trains I saw each day





	Key = 1 train
--	------------------

Day	Tally	Total
Thursday		
Friday		
Saturday		
Sunday		

Fill in the total in each pictogram.

A pictogram to show the number of pancakes each child ate

	Key = 1 pancake
--	--------------------

Day	Tally	Total
Mary		
John		
Amy		
Pete		

Draw the correct pictures to show the right total

A pictogram to show the number of red sweets in each coloured pack.



Key
= 1 red sweet

Day	Tally	Total
Thursday		2
Friday		4
Saturday		1
Sunday		3

A pictogram to show the number of each coloured balloon.



Key
= 1 balloon

Day	Tally	Total
Thursday		5
Friday		7
Saturday		9
Sunday		3