





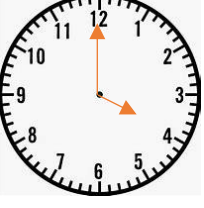


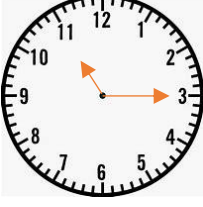


Lesson 22 - Year 2 – Time – Finding durations of time.

Look at the start times on the clock and the end times to find the duration of time.

Start Time	End Time	Duration
		<p>Start: 2 o'clock End: 3 o'clock Duration: 1 hour</p>
		<p>Start: 7 o'clock End: 9 o'clock Duration: 2 hours</p>
		<p>Start: 10 o'clock End: half past 10 Duration: 30 minutes</p>
		<p>Start: 4 o'clock End: half past 4 Duration: 30 minutes</p>
		<p>Start: 11 o'clock End: quarter past 11 Duration: 15 minutes</p>

Lesson 23 - Year 2 – Finding End Times

I leave for work at 9 o'clock.
It takes me 1 hour to get there.

What time do I get to work?

9 o'clock + 1 hour = 10 o'clock

My swimming lesson starts at 2 o'clock.
It lasts for 1 hour.

What time does it finish?

2 o'clock + 1 hour = 3 o'clock

I leave for London at 6 o'clock.
It takes me 3 hours to get there.

What time do I get there?

6 o'clock + 3 hours = 9 o'clock

I leave the house at 8 o'clock.
It takes me half an hour to walk to town.

What time do I get there?

8 o'clock + half an hour = 8.30/ half past 8

I leave the gym at 1 o'clock.
It takes me a quarter of an hour to get home.

What time do I get home?

1 o'clock + quarter of an hour = 1.15/ quarter past 1.

Lesson 24 – Time – comparing and sequencing time.

Challenge 1

Shade in the smallest time in each pair.

40 minutes	25 minutes
------------	------------

1 hour	55 minutes
--------	------------

Challenge 2

Shade in the largest time in each pair.

2 hours	45 minutes
---------	------------

40 minutes	25 minutes
------------	------------

Challenge 3

Put the times in order starting with the smallest

15 minutes	45 minutes	30 minutes
15 minutes	30 minutes	45 minutes

Challenge 4

Put the times in order starting with the largest.

1 hour	2 hours	70 minutes
2 hours	70 minutes	1 hour

11 Kemi goes to four clubs each week.

Which club lasts the **longest**?

Circle it.

Swimming
45 minutes

Art
2 hours

Music
75 minutes

Drama
1 hour



1 mark