





Year 2 —Geometry.
Lesson 6—turning shapes.

How has the red arrow been turned to get to the blue arrow?



1



2



3



Complete the turns.

Turn the bee half a turn clockwise



Turn the bee a three quarter turn anti-clockwise.

