

Solve these time problems

1

Draw 4 minutes to 3.



2

Drawn 7 minutes past 2.



3

Draw 39 minutes past 5.



4


Draw 28 minutes past 7.



Solve these time problems


1

What is the time?




2

What is the time?



3

What is the time?



4

What is the time?

