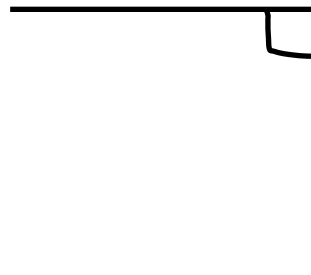

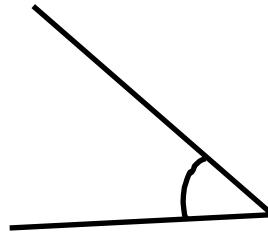
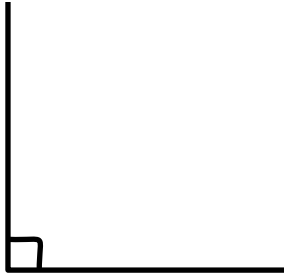


Year 4 Lesson 35—Identifying angles

Label the angles with the correct name.



Draw an angle to match the correct name.

Acute angle	Right angle
Obtuse angle	Straight line angle