

Year 4—Decimals—Lesson #9—dividing by 10.

Use a place value grid to divide each of these numbers by 10.

3

$\div 10$

=

0.3

8

$\div 10$

=

0.8

15

$\div 10$

=

1.5

32

$\div 10$

=

3.2

47

$\div 10$

=

4.7

68

$\div 10$

=

6.8

Given the answer, what was the number you started with?

4

$\div 10$

=

0.4

16

$\div 10$

=

1.6

28

$\div 10$

=

2.8

37

$\div 10$

=

3.7

61

$\div 10$

=

6.1

96

$\div 10$

=

9.6

Year 4—Decimals—Lesson #10—dividing by 100

Use a place value grid to divide each of these numbers by 10.

5

$\div 100$

=

0.05

8

$\div 100$

=

0.08

17

$\div 100$

=

0.17

29

$\div 100$

=

0.29

48

$\div 10$

=

0.48

62

$\div 100$

=

0.62

Given the answer, what was the number you started with?

4

$\div 100$

=

0.04

19

$\div 100$

=

0.19

27

$\div 100$

=

0.27

35

$\div 100$

=

0.35

61

$\div 10$

=

0.61

96

$\div 10$

=

0.96

Year 4—Money lesson #1— writing money as decimals

Write each amount using decimals.

$$6\text{p} = \text{£}0.06$$

$$12\text{p} = \text{£}0.12$$

$$58\text{p} = \text{£}0.58$$

$$\text{£}1 \text{ and } 76\text{p} = \text{£}1.76$$

$$\text{£}2 \text{ and } 13\text{p} = \text{£}2.13$$

$$\text{£}4 \text{ and } 2\text{p} = \text{£}4.02$$

$$\text{£}10 \text{ and } 89\text{p} = \text{£}10.89$$

Write each amount as pounds and pence.

$$\text{£}0.08 = 8\text{p}$$

$$\text{£}0.45 = 45\text{p}$$

$$\text{£}0.90 = 90\text{p}$$

$$\text{£}1.13 = \text{£}1 \text{ and } 13\text{p}$$

$$\text{£}2.54 = \text{£}2 \text{ and } 54\text{p}$$

$$\text{£}8.78 = \text{£}8 \text{ and } 78\text{p}$$

$$\text{£}13.09 = \text{£}13 \text{ and } 9\text{p}$$

Count the money and write it as a decimal.




£1.72



£3.38



£7.57




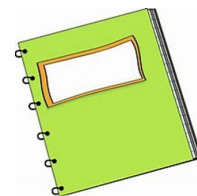
£12.33

Year 4—Money lesson #2—comparing amounts of money


Circle the amount that is more in each pair.

- A. **£3.26** or £3.15
- B. £1 and 15p or **£1.51**
- C. **£10.61** or £10 and 16p
- D. **£0.42** or 38p

You have £1.50. Circle all the items you have enough money to buy.



You have £2.20. Circle all the items you don't have enough to buy.



Which is more?



£1.27



£3.29

Which is less?



£6.55



£12.43