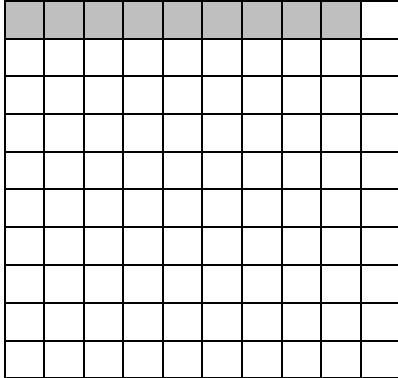
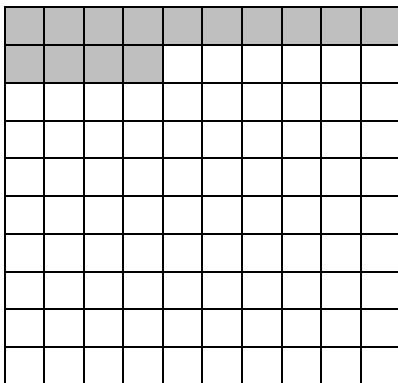


Year 4 Decimals #3 writing hundredths


Fill in the fraction and decimal.



Fraction	Decimal
$9/100$	0.09




Fraction	Decimal
$14/100$	0.14

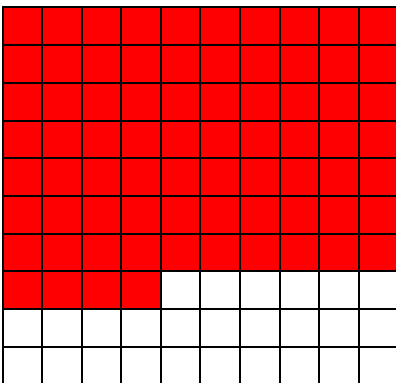


Fraction	Decimal
$45/100$	0.45

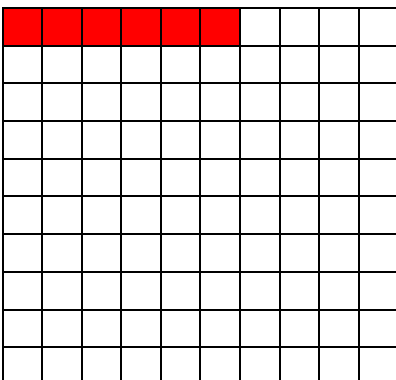
Complete the missing diagram/fraction/decimal



Fraction	Decimal
$\frac{87}{100}$	0.87



Fraction	Decimal
$\frac{74}{100}$	0.74



Fraction	Decimal
$\frac{6}{100}$	0.06